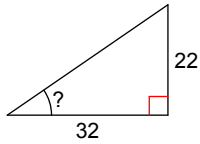


Trigonometric Ratios Extra Practice

Date _____ Period _____

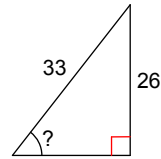
Find the measure of the indicated angle to the nearest degree.

1)



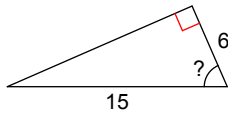
- A) 43° B) 35°
C) 47° D) 55°

2)



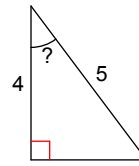
- A) 38° B) 68°
C) 52° D) 75°

3)



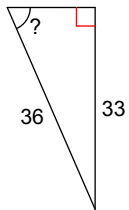
- A) 79° B) 66°
C) 22° D) 24°

4)



- A) 51° B) 37°
C) 39° D) 53°

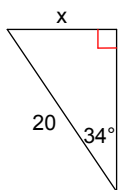
5)



- A) 47° B) 43°
C) 89° D) 66°

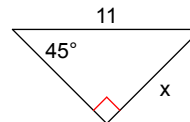
Find the missing side. Round to the nearest tenth.

6)



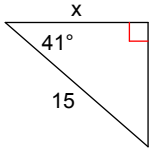
- A) 12.5 B) 11.2
C) 35.8 D) 10.8

7)



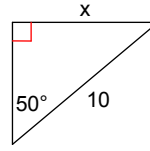
- A) 8.0 B) 7.8
C) 15.6 D) 5.9

8)



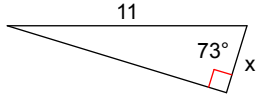
- A) 9.0 B) 19.9
C) 11.3 D) 7.9

9)



- A) 13.1 B) 8.7
C) 7.7 D) 14.6

10)



- A) 37.6 B) 3.2
C) 28.4 D) 4.2

Answers to Trigonometric Ratios Extra Practice (ID: 1)

1) B
9) C

3) B

5) D

7) B