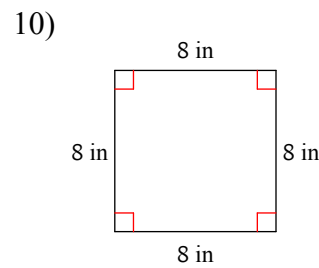
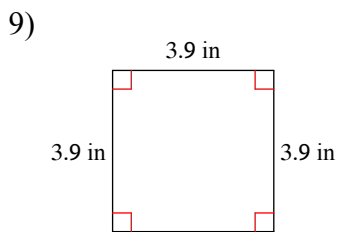
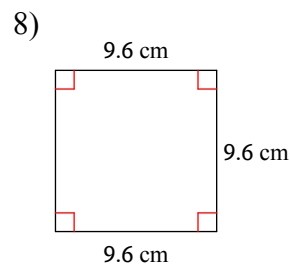
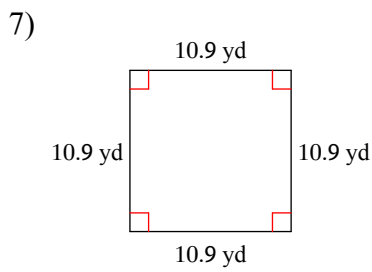
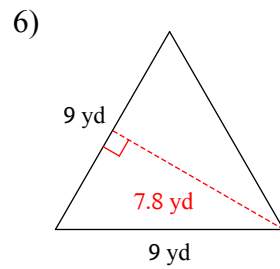
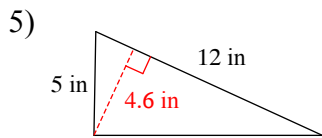
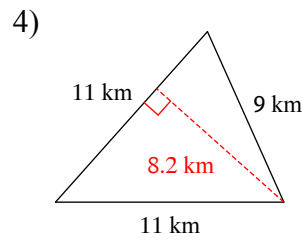
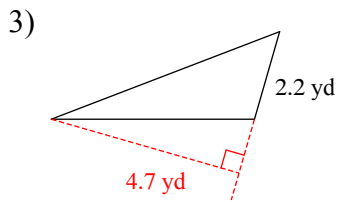
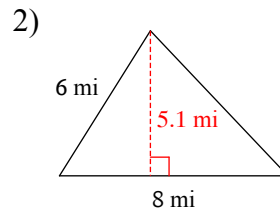
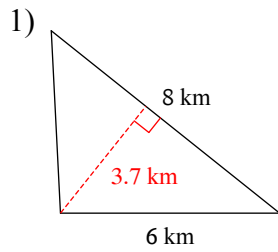
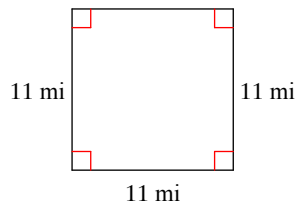


Area of 2D Shapes Review

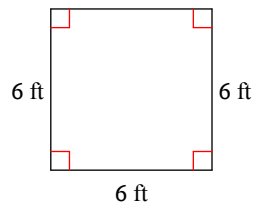
Find the area of each.



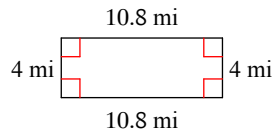
11)



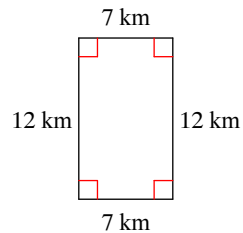
12)



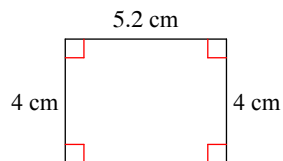
13)



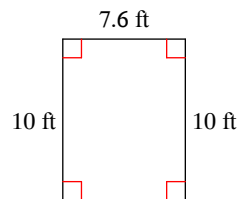
14)



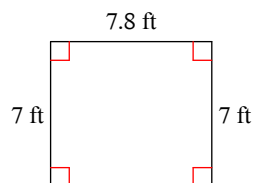
15)



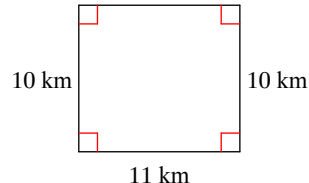
16)



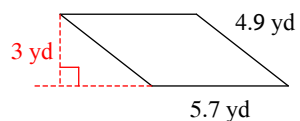
17)



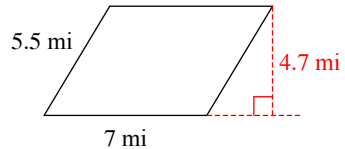
18)



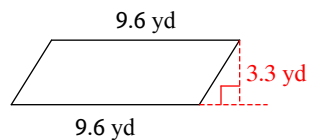
19)



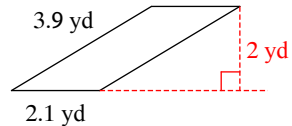
20)



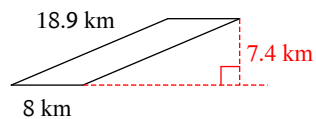
21)



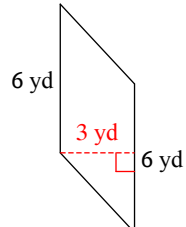
22)



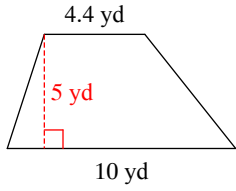
23)



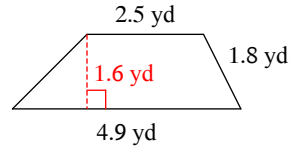
24)



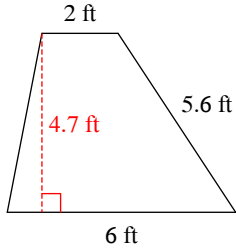
25)



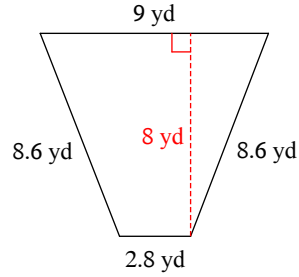
26)



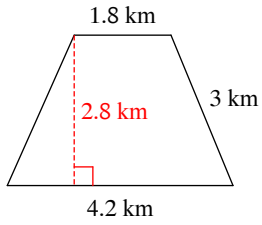
27)



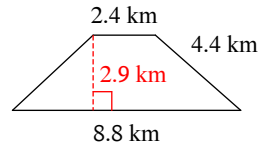
28)



29)

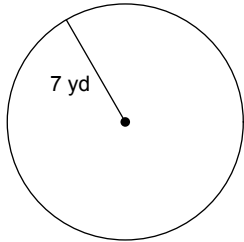


30)

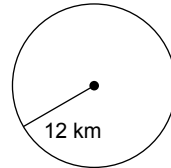


Find the area of each. Use your calculator's value of π . Round your answer to the nearest tenth.

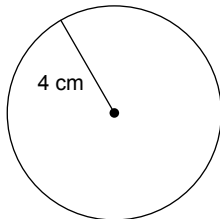
31)



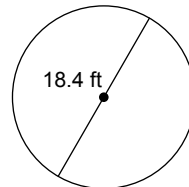
32)



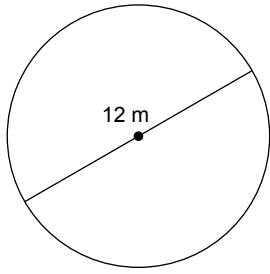
33)



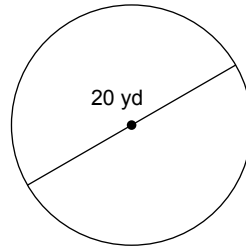
34)



35)

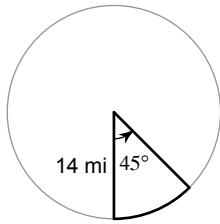


36)

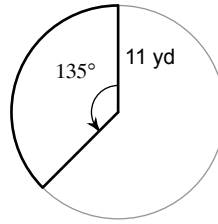


Find the area of each sector. Round your answers to the nearest tenth.

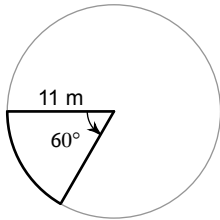
37)



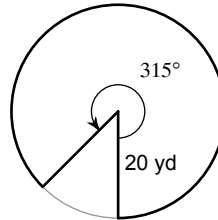
38)



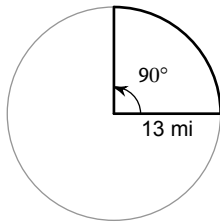
39)



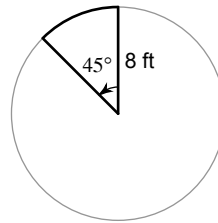
40)



41)

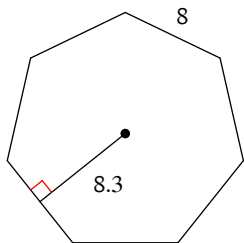


42)

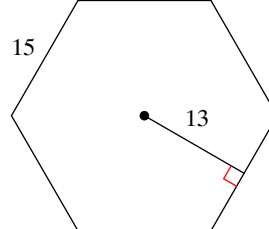


Find the area of each regular polygon. Round your answer to the nearest tenth if necessary.

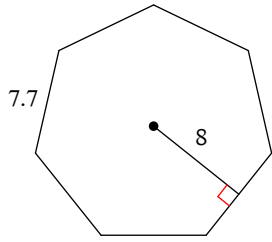
43)



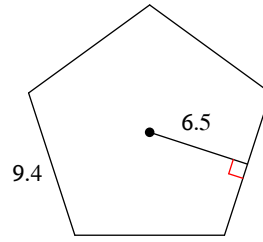
44)



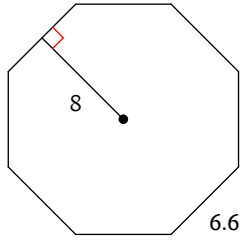
45)



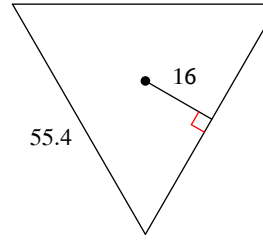
46)



47)



48)



Answers to Area of 2D Shapes Review (ID: 1)

- | | | | |
|---------------------------|---------------------------|---------------------------|----------------------------|
| 1) 14.8 km ² | 2) 20.4 mi ² | 3) 5.17 yd ² | 4) 45.1 km ² |
| 5) 27.6 in ² | 6) 35.1 yd ² | 7) 118.81 yd ² | 8) 92.16 cm ² |
| 9) 15.21 in ² | 10) 64 in ² | 11) 121 mi ² | 12) 36 ft ² |
| 13) 43.2 mi ² | 14) 84 km ² | 15) 20.8 cm ² | 16) 76 ft ² |
| 17) 54.6 ft ² | 18) 110 km ² | 19) 17.1 yd ² | 20) 32.9 mi ² |
| 21) 31.68 yd ² | 22) 4.2 yd ² | 23) 59.2 km ² | 24) 18 yd ² |
| 25) 36 yd ² | 26) 5.92 yd ² | 27) 18.8 ft ² | 28) 47.2 yd ² |
| 29) 8.4 km ² | 30) 16.24 km ² | 31) 153.9 yd ² | 32) 452.4 km ² |
| 33) 50.3 cm ² | 34) 265.9 ft ² | 35) 113.1 m ² | 36) 314.2 yd ² |
| 37) 77.0 mi ² | 38) 142.5 yd ² | 39) 63.4 m ² | 40) 1099.6 yd ² |
| 41) 132.7 mi ² | 42) 25.1 ft ² | 43) 232.4 | 44) 585 |
| 45) 215.6 | 46) 152.8 | 47) 211.2 | 48) 1329.6 |