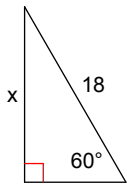


Assignment

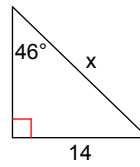
Find the missing side. Round to the nearest tenth.

1)



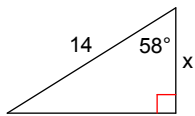
- A) 20.8 B) 15.6
C) 22.7 D) 22.1

2)



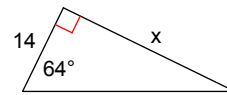
- A) 19.5 B) 10.1
C) 26.3 D) 15.1

3)



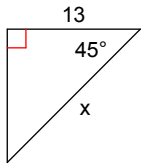
- A) 8.7 B) 5.1
C) 26.4 D) 7.4

4)



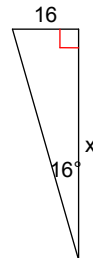
- A) 25.1 B) 5.1
C) 28.7 D) 6.8

5)



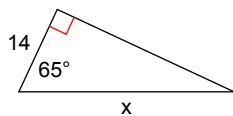
- A) 18.4 B) 25.8
C) 9.2 D) 17.9

6)



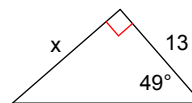
- A) 55.8 B) 4.6
C) 74.5 D) 63.4

7)



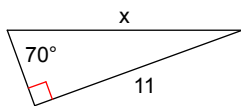
- A) 5.9 B) 33.1
C) 41.0 D) 40.1

8)



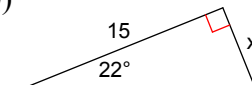
- A) 14.7 B) 11.3
C) 22.2 D) 15.0

9)



- A) 13.6 B) 10.3
C) 17.5 D) 11.7

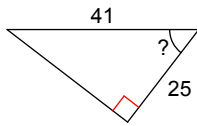
10)



- A) 8.9 B) 7.5
C) 6.1 D) 37.1

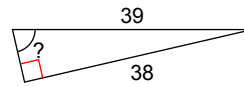
Find the measure of the indicated angle to the nearest degree.

11)



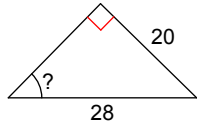
- A) 31° B) 52°
 C) 38° D) 59°

12)



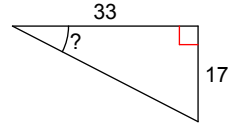
- A) 77° B) 22°
 C) 44° D) 46°

13)



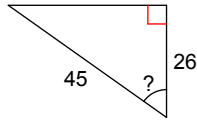
- A) 46° B) 44°
 C) 36° D) 54°

14)



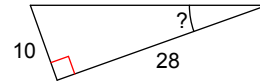
- A) 31° B) 27°
 C) 59° D) 63°

15)



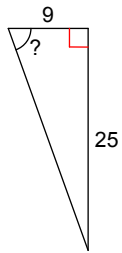
- A) 35° B) 30°
 C) 55° D) 52°

16)



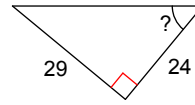
- A) 69° B) 20°
 C) 70° D) 21°

17)



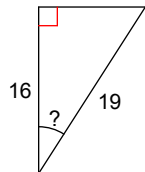
- A) 70° B) 21°
 C) 74° D) 69°

18)



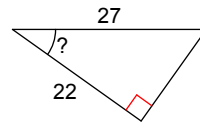
- A) 34° B) 50°
 C) 56° D) 40°

19)



- A) 50° B) 33°
 C) 11° D) 57°

20)

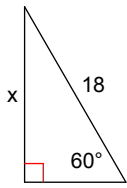


- A) 39° B) 55°
 C) 51° D) 35°

Assignment

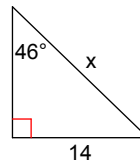
Find the missing side. Round to the nearest tenth.

1)



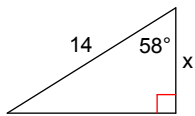
- A) 20.8 *B) 15.6
C) 22.7 D) 22.1

2)



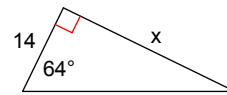
- *A) 19.5 B) 10.1
C) 26.3 D) 15.1

3)



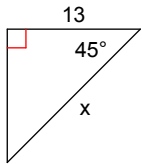
- A) 8.7 B) 5.1
C) 26.4 *D) 7.4

4)



- A) 25.1 B) 5.1
*C) 28.7 D) 6.8

5)



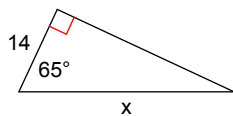
- *A) 18.4 B) 25.8
C) 9.2 D) 17.9

6)



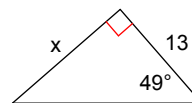
- *A) 55.8 B) 4.6
C) 74.5 D) 63.4

7)



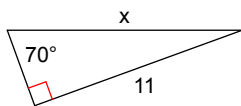
- A) 5.9 *B) 33.1
C) 41.0 D) 40.1

8)



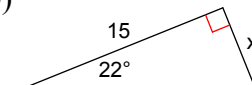
- A) 14.7 B) 11.3
C) 22.2 *D) 15.0

9)



- A) 13.6 B) 10.3
C) 17.5 *D) 11.7

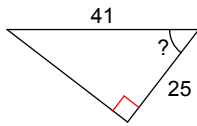
10)



- A) 8.9 B) 7.5
*C) 6.1 D) 37.1

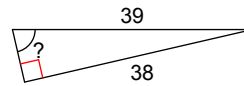
Find the measure of the indicated angle to the nearest degree.

11)



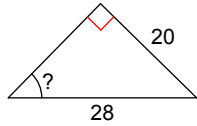
- A) 31° *B) 52°
 C) 38° D) 59°

12)



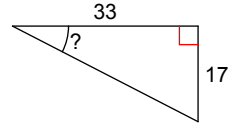
- *A) 77° B) 22°
 C) 44° D) 46°

13)



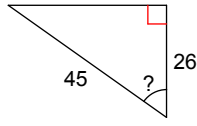
- *A) 46° B) 44°
 C) 36° D) 54°

14)



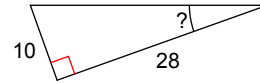
- A) 31° *B) 27°
 C) 59° D) 63°

15)



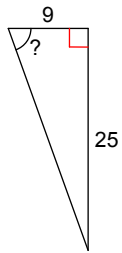
- A) 35° B) 30°
 *C) 55° D) 52°

16)



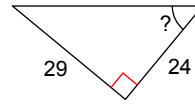
- A) 69° *B) 20°
 C) 70° D) 21°

17)



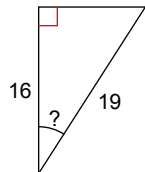
- *A) 70° B) 21°
 C) 74° D) 69°

18)



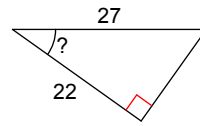
- A) 34° *B) 50°
 C) 56° D) 40°

19)



- A) 50° *B) 33°
 C) 11° D) 57°

20)



- A) 39° B) 55°
 C) 51° *D) 35°